

WORKSHEET – MATHS

CLASS: III _____

11. JUGS AND MUGS

ROLL NO: _____

NAME: _____

DATE: _____

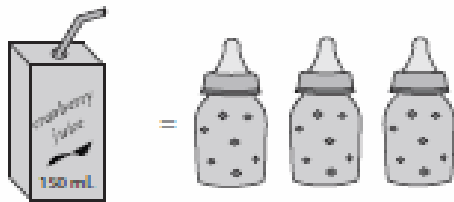
I. CALCULATE THE CAPACITY:

1)



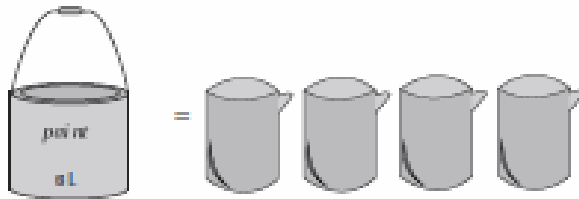
Capacity of each  = _____ mL

2)



Capacity of each  = _____ mL

3)



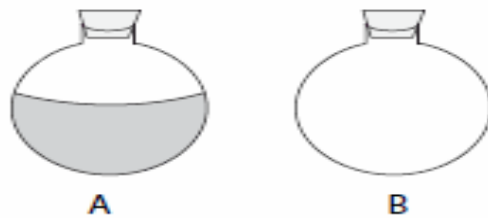
Capacity of each  = _____ L

II. SHADED THE FOLLOWING AS PER INSTRUCTION:

1) Shade B to show the liquid more than A.



2) Shade B to show the liquid less than A.



III. PUT THE NUMBER 1,2,3 UNDER THE FOLLOWING ACCORDING TO THEIR CAPACITY:







IV. CONVERT THE FOLLOWING:

1) 1 litre = _____ ml

6) 750 ml = _____ l

2) $\frac{1}{2}$ litre = _____ ml

7) 250 ml = _____ l

3) $\frac{3}{4}$ litre = _____ ml

8) 1000 ml = _____ l

4) $\frac{1}{4}$ litre = _____ ml









9) 500 ml = _____ l

5) $1 \frac{1}{2}$ litres = _____ ml

10) 1500 ml = _____ l

V.

Circle the containers that hold *more* water with green and the containers that hold *less* water with red. Fill in the blanks with *more* or *less*.

1. 		The cup has _____ water but the glass has _____ water.
2. 		The water jar has _____ water but the bowl has _____ water.
3. 		The bottle has _____ water but the flower vase has _____ water.
4. 		The pail has _____ water but the mineral water bottle has _____ water.