

KENDRIYA VIDYALAYA TPKM MADURAI

WORKSHEET- MATHS

TOPIC: FUN WITH GIVE AND TAKE


NAME: \_\_\_\_\_

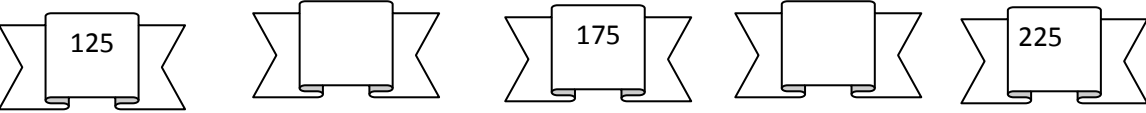
ROLL NO. : \_\_\_\_\_


CLASS: III SEC: \_\_\_\_\_

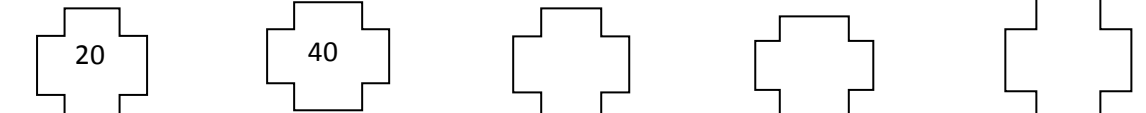
DATE: \_\_\_\_\_

I. WRITE THE MISSING NUMBER:

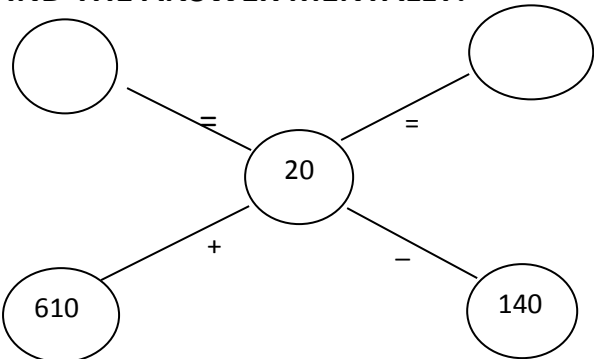
1. 

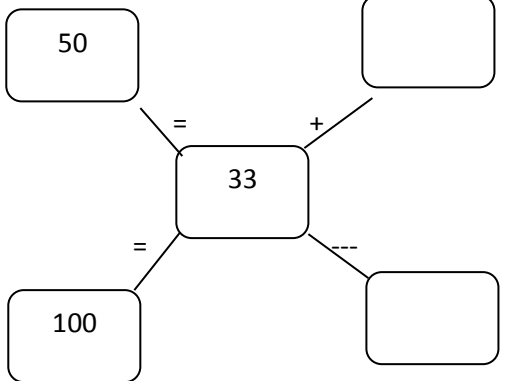
2. 

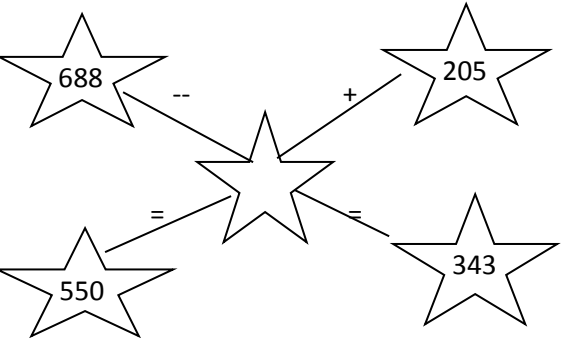
3. 

4. 

II. FIND THE ANSWER MENTALLY:

1. 

2. 

3. 

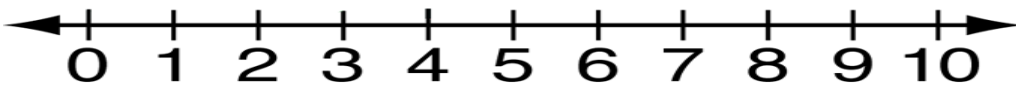
III. SOLVE THE PROBLEM:

1. Rakhi is 12 years old. Her mother is 38 years old. How much younger is Rakhi than her mother?

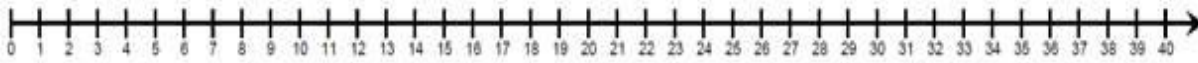
2. Sachin scored 186 runs in a test cricket match. How many more runs should he make to score a double century?

**IV. FIND THE ANSWER USING NUMBER LINE:**

1.  $10 - 7 =$



2.  $30 - 10 =$



**V. CHECK THE FOLLOWING USING ADDITION:**

1.

2	3	4
1	2	3
-		

+


2.

4	6	3
1	5	7
-		

+


**VI. DO THE FOLLOWING:**

$$\begin{array}{r} 15 \\ 8 - \\ \hline \\ \hline \end{array}$$

$$\begin{array}{r} 38 \\ 25 - \\ \hline \\ \hline \end{array}$$

$$\begin{array}{r} 59 \\ 38 - \\ \hline \\ \hline \end{array}$$

$$\begin{array}{r} 247 \\ 198 - \\ \hline \\ \hline \end{array}$$

$$\begin{array}{r} 689 \\ 490 - \\ \hline \\ \hline \end{array}$$